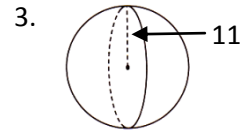
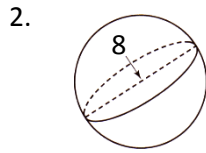
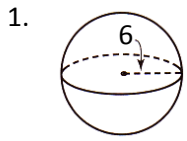
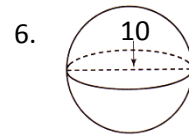
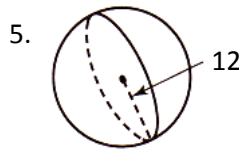
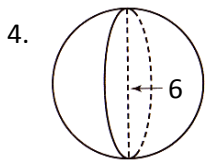


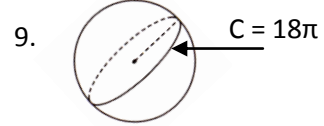
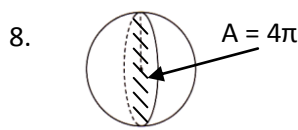
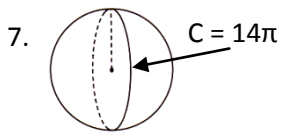
Find the surface area and volume of each sphere in terms of pi. Express decimals as fractions.



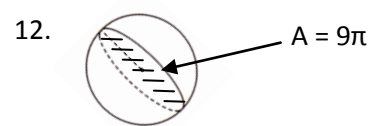
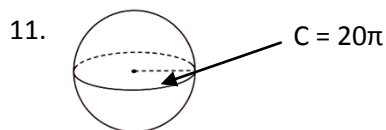
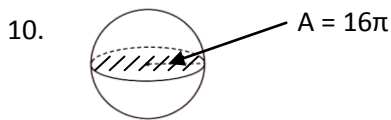
SA = _____ V = _____ SA = _____ V = _____ SA = _____ V = _____



SA = _____ V = _____ SA = _____ V = _____ SA = _____ V = _____



SA = _____ V = _____ SA = _____ V = _____ SA = _____ V = _____



SA = _____ V = _____ SA = _____ V = _____ SA = _____ V = _____